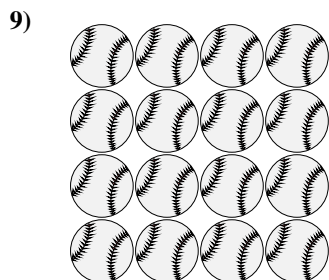
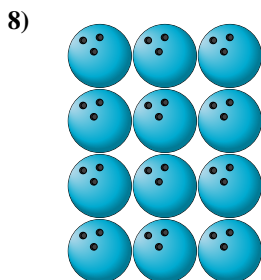

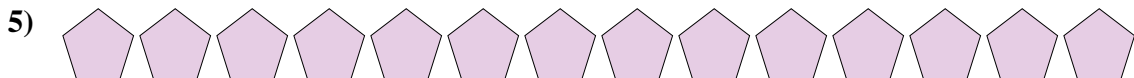


Count the amount of each of the different objects.



Answers

1. \_\_\_\_\_

2. \_\_\_\_\_

3. \_\_\_\_\_

4. \_\_\_\_\_

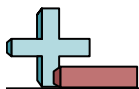
5. \_\_\_\_\_

6. \_\_\_\_\_

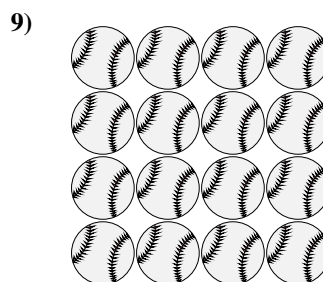
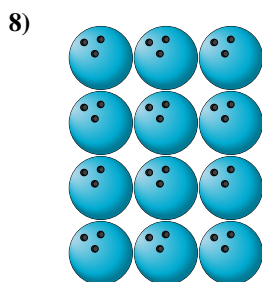

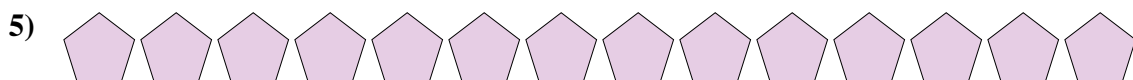
7. \_\_\_\_\_

8. \_\_\_\_\_

9. \_\_\_\_\_



Count the amount of each of the different objects.

Answers1. **14**2. **17**3. **12**4. **16**5. **14**6. **3**7. **12**8. **12**9. **16**